








# Test your tactics!



<p><b>Find the Mate</b></p> 	<p><b>Find the Net</b></p> 
<p><b>Find the Jump</b></p> 	<p><b>Find the Pin</b></p> 
<p><b>Find the Fork</b></p> 	<p><b>Find the Tie</b></p> 

**Answers:**

Mates : 1...Qh2+ and 2...Qh1#

Jumps : 1...Nxf3+ and 2...Bxd4

Forks : 1. Qh8+ and 2. Nxf7+ (one of Spassky's)

Nets : 1. Nh4

Pins : 1. Ne6!

Ties : 1. Qg3 (one of Fischer's)